





Monday

Name _____

Nickel Graph

Heads or tails? Toss a nickel 15 times and tally your results. Graph it!

<div>Heads Tally</div> <div></div>	
<div>Tails Tally</div> <div></div>	
<div>Total amount in cents:</div> <div></div>	<div></div>

Heads		
Tails		

Color the Coins

Color coins that equal the amount on the left.

53¢



76¢



80¢



99¢



19¢



Color the Coins

Color coins that equal the amount on the left.

\$1.13



\$1.05



\$1.19



\$1.40



\$1.54




What is the total?




Comparing Coins

Draw a greater than ($>$) or less than ($<$) symbol in the box to compare the coins in the banks.

























Friday

Name: _____

Comparing Money

Write the amount shown by each set of coins.

Then, compare the sets of coins using the symbols: $<$, $>$, or $=$.



Compare: $<$, $>$, or $=$



amount: _____

amount: _____



Compare: $<$, $>$, or $=$



amount: _____

amount: _____



Compare: $<$, $>$, or $=$



amount: _____

amount: _____



Compare: $<$, $>$, or $=$



amount: _____

amount: _____

Name: _____

Counting Coins

Write the amount of money shown in each box.



total: _____



total: _____



total: _____



total: _____



total: _____



total: _____

★ **Challenge:** Can you count all the coins on this page and find the total?